



Subitising Space Race

How fast can you identify the number of dots?

Identify the number of dots in each box on the track and write your answers in the stars as you go. See how long it takes you to finish the race!



The track consists of 14 segments. Each segment contains either a star for writing an answer or a set of white dots for counting. The segments are: 1. Star, 2. 4 dots, 3. Star, 4. 5 dots, 5. Star, 6. 6 dots, 7. Star, 8. 7 dots, 9. Star, 10. 8 dots, 11. Star, 12. 9 dots, 13. Star, 14. 10 dots.




START

Subitising Space Race Answers

How fast can you identify the number of dots?

Identify the number of dots in each box on the track and write your answers in the stars as you go. See how long it takes you to finish the race!



1

4

7

2

6

3

5

START